


Calculus

Derivative

• we find the slope of the tangent line of a function at certain point.



• Slope of a line is a number that measures how the line looks like, e.g.,

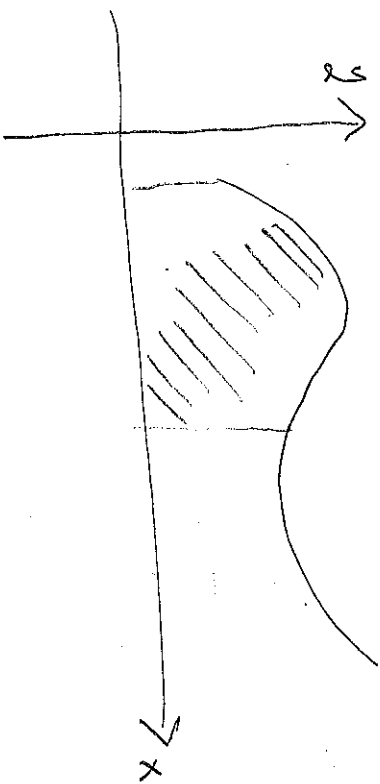
slope = 1

slope = -1

slope = ∞

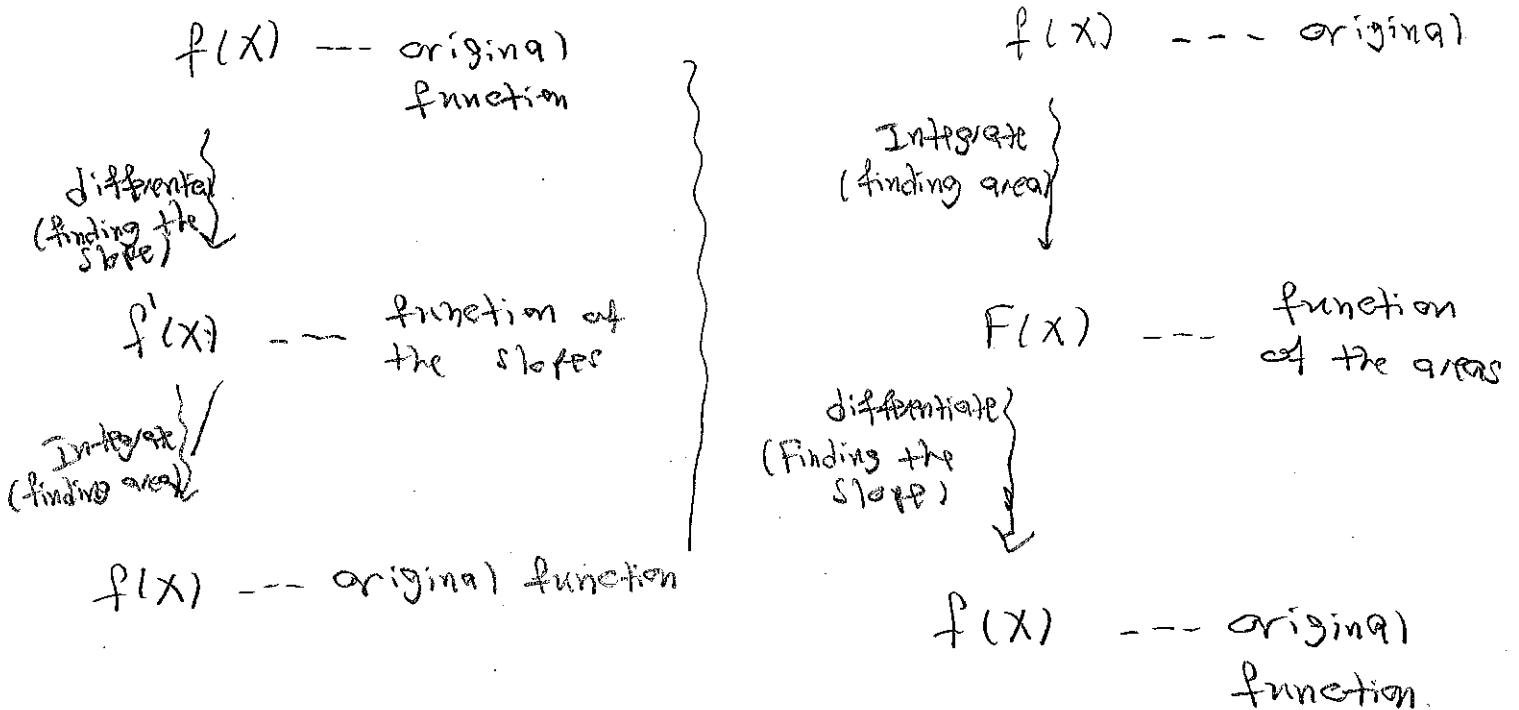
Integration

• we find the area under the graph of a function



Question :- What is the relation between differentiation and integration? In other words, what is the relation between finding the slope of a tangent line (derivative) and finding the area under the graph (Integration).

Answer :- Surprisingly enough, these two operations are reversing each other. So if we integrate, then we differentiate we get the original function back and if we differentiate first and integrate, we get again the original function back. This is what the "Fundamental Theorem of Calculus" says!



The common ingredient in defining derivative & Integral is the concept of the limit.

§ 2.2 - limit of a function and limit laws

① Definition of the limit

Motivation Example:

How does the function $f(x) = \frac{x^2 - 1}{x - 1}$ behave at $x = 1$?

$f(1) = \frac{1^2 - 1}{1 - 1} = \frac{0}{0} \leftarrow$ undefined! so we can't substitute

directly with $x = 1$, so instead we get closer to 1 and check the values!

x	0.9	0.99	0.999	1	1.001	1.01	1.1
f(x)	1.9	1.99	1.999	---	2.001	2.01	2.1

↘ (2) ↖

So $f(x)$ approaches 2 as x approaches 1.

we write that

$$\lim_{x \rightarrow 1} \frac{x^2 - 1}{x - 1} = 2$$

Question: In order to find the limit of a function, do we need to make table like the above one?

Answer: No, you will learn algebraic method to find the limit. But for now try to find the limit of these functions using the table and write the general rule. [3]

EXERCISE 1: Find the limit of the following:

(a) $\lim_{x \rightarrow 5} x$

(b) $\lim_{x \rightarrow x_0} x$

(c) $\lim_{x \rightarrow 5} 7$

(d) $\lim_{x \rightarrow x_0} k$, k is constant

Question: Does the limit always exist? No!

Example 2: Find the limit of the following functions as

(a)
$$U(x) = \begin{cases} 0 & , x < 0 \\ 1 & , x \geq 0 \end{cases}$$

(b)
$$g(x) = \begin{cases} \frac{1}{x} & , x \neq 0 \\ 0 & , x = 0 \end{cases}$$

(c)
$$f(x) = \begin{cases} 0 & , x \leq 0 \\ \sin \frac{1}{x} & , x > 0 \end{cases}$$

Solution:

(a)

x	-0.1	-0.01	0	0.01	0.1
$f(x)$	0	0	1	1	1

\downarrow \downarrow
 0 1

Limit has two options either 0 or 1, so the limit itself doesn't exist.

② The limit Rules

Assume $\lim_{x \rightarrow c} f(x) = L$ and $\lim_{x \rightarrow c} g(x) = M$ (Both exist)

1. Sum Rule: $\lim_{x \rightarrow c} [f(x) \pm g(x)] = \lim_{x \rightarrow c} f(x) \pm \lim_{x \rightarrow c} g(x)$
 $= L \pm M.$

2. Product Rule: $\lim_{x \rightarrow c} [f(x) \cdot g(x)] = \lim_{x \rightarrow c} f(x) \cdot \lim_{x \rightarrow c} g(x) = M \cdot L$

3. Quotient Rule: $\lim_{x \rightarrow c} \frac{f(x)}{g(x)} = \frac{L}{M}, M \neq 0.$

4. Power Rule: $\lim_{x \rightarrow c} (f(x))^n = \left(\lim_{x \rightarrow c} f(x) \right)^n = L^n$

5. Root Rule: $\lim_{x \rightarrow c} \sqrt[n]{f(x)} = \sqrt[n]{\lim_{x \rightarrow c} f(x)} = \sqrt[n]{L}$

Example 3:

(a) $\lim_{x \rightarrow 3} x^3 = \left(\lim_{x \rightarrow 3} x \right)^3 = (3)^3 = 27$

(b) $\lim_{x \rightarrow c} \frac{x^4 + x^2 - 1}{x^2 + 5} = \frac{c^4 + c^2 - 1}{c^2 + 5}$

(c) $\lim_{x \rightarrow 2} \sqrt{4x^2 - 3} = \sqrt{4c^2 - 3}$

To find $\lim_{x \rightarrow c} f(x)$

- 1- Direct substitute c to check if there are no problems.
- 2- Use algebraic method to clear any problems.

Example 4: Find the limit (Cancel)

$$\boxed{1} \lim_{x \rightarrow 1} \frac{x^2 + x - 2}{x^2 - x} = \frac{0}{0} \text{ undefined} = \lim_{x \rightarrow 1} \frac{(x+2)(x-1)}{x(x-1)} = \lim_{x \rightarrow 1} \frac{(x+2)}{x} = \frac{3}{1} = 3$$

(A) Eliminating zero denominator by cancelling common factors

$$\boxed{4} \lim_{x \rightarrow 5} \frac{x-5}{x^2-25}$$

$$\boxed{3} \lim_{y \rightarrow 0} \frac{5y^3 + 2y^2}{3y^4 - 16y^2}$$

$$\boxed{6} \lim_{x \rightarrow 9} \frac{\sqrt{x} - 3}{x - 9}$$

$$\boxed{2} \lim_{x \rightarrow 3} \frac{x^2 - 3x}{x^2 - 9}$$

$$\boxed{5} \lim_{x \rightarrow 1} \frac{x^2 + x - 2}{3x^2 - x - 2}$$

(B) Conjugate and multiplying by $\frac{1}{1}$

$$\boxed{7} \lim_{x \rightarrow 0} \frac{\sqrt{x^2+100} - 10}{x^2} = \frac{0}{0} \text{ undefined!}$$

$$\lim_{x \rightarrow 0} \frac{\sqrt{x^2+100} - 10}{x^2} \cdot \frac{(\sqrt{x^2+100} + 10)}{(\sqrt{x^2+100} + 10)} = \lim_{x \rightarrow 0} \frac{x^2 + 100 - 100}{x^2(\sqrt{x^2+100} + 10)} = \frac{1}{20} = 0.05$$

Example 5:

Exercise Find the limit of each of the following:

$$(a) \lim_{x \rightarrow -1} \frac{\sqrt{x^2+8} - 3}{(x+1)}$$

$$(b) \lim_{x \rightarrow 4} \frac{4-x}{(5-\sqrt{x^2+9})}$$

The Sandwich Theorem (Squeeze Theorem)

Suppose $g(x) \leq f(x) \leq h(x)$

Suppose

$f(x)$ is squeezed between $g(x)$ & $h(x)$.

$$\lim_{x \rightarrow c} g(x) = \lim_{x \rightarrow c} h(x) = L. \text{ Then}$$

$$\lim_{x \rightarrow c} f(x) = L.$$

Example 5

(a) Find $\lim_{x \rightarrow 0} u(x)$ if $1 - \frac{x^2}{4} \leq u(x) \leq 1 + \frac{x^2}{2}$

We take the limit as $x \rightarrow 0$ to get:

$$\lim_{x \rightarrow 0} \left(1 - \frac{x^2}{4}\right) \leq \lim_{x \rightarrow 0} u(x) \leq \lim_{x \rightarrow 0} \left(1 + \frac{x^2}{2}\right)$$

$$1 \leq \lim_{x \rightarrow 0} u(x) \leq 1 \quad \rightarrow \quad \lim_{x \rightarrow 0} u(x) = 1$$

Exercise:

(a) $\sqrt{5-2x^2} \leq f(x) \leq \sqrt{5-x^2}$. Find $\lim_{x \rightarrow 0} f(x)$?

(b) $\lim_{x \rightarrow 0} x \sin x$?

