


§ 4.6 - Optimization

Example 1: what is the smallest perimeter possible for a rectangle whose area is 4 cm^2 ? what are the dimensions?

Solution: Given = area = 4 \rightarrow $lw = 4 \rightarrow l = \frac{4}{w}$



Required: minimize perimeter

$$\text{minimize } P = 2l + 2w$$

$$P = 2 \cdot \frac{4}{w} + 2w = \frac{8}{w} + 2w$$

we need to find the local minimum, so $P'(w) = -\frac{8}{w^2} + 2$

$$P' = 0 \quad \text{or} \quad P' \text{ DNE}$$

$$-\frac{8}{w^2} + 2 = 0$$

$w = 0$. rejected!

$$2 = \frac{8}{w^2}$$

$$2w^2 = 8$$

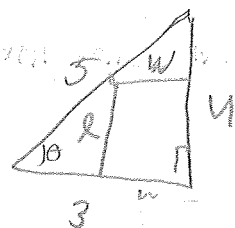
$$w^2 = 4$$

$$\boxed{w = 2}, \quad w = -2 \text{ rejected!}$$

Now we check $w = 2$ is local minimum by the second derivative test, so $P''(2) = \frac{-16}{2^3} < 0$, so $w = 2$, $l = 2$ and $P = 8 \text{ cm}$ ✓

Exercise 1: Find the smallest area of a rectangle whose perimeter is 32 cm.

Example 2: Determine the dimensions of the rectangle of largest area that can be inscribed in the right triangle shown in the figure.



Solution:

Given: $\tan \theta = \frac{4}{3} = \frac{l}{3-w} \rightarrow 4(3-w) = 3l \rightarrow l = \frac{4}{3}(3-w)$

Required: Minimize: Area = lw

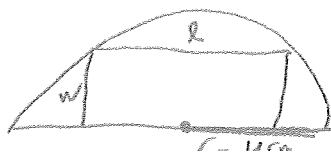
$$A(w) = \frac{4}{3}(3-w)w = 4w - \frac{4}{3}w^2$$

$$A'(w) = 0 \rightarrow 4 - \frac{8}{3}w = 0 \rightarrow w = \frac{12}{8} = \frac{3}{2}$$

$A''(w) = -\frac{8}{3} < 0$, so we have local maximum.

$$w = \frac{3}{2} \text{ cm}, \quad l = 2 \text{ cm} \quad \text{and} \quad \text{Area} = 3 \text{ cm}^2$$

Exercise 2: same as above, but



Example 3: Find a positive number for which the sum of it and its reciprocal is the smallest possible.

Solution:

Required: minimize $S(x) = x + \frac{1}{x}$

$$S'(x) = 1 - \frac{1}{x^2}$$

$$S'(x) = 0$$

$S'(x)$ DNE if $x=0$
(rejected)

$$1 - \frac{1}{x^2} = 0 \rightarrow x^2 = 1$$

$$\boxed{x=1} \text{ or } \boxed{x=-1}$$

To find which one is a local minimum, we use the 2nd derivative test to get

$$S''(x) = +\frac{2}{x^3} \text{ , so } S''(1) = +2 \geq 0 \text{ --- maximum}$$

$$S''(-1) = -2 \leq 0 \text{ --- minimum}$$

Hence $x=+1$ is a local minima.

Exercise 3: Find a positive number for which the sum and its reciprocal and four times its square is the smallest possible.

Example 4: For what values of a and b make

$$f(x) = x^3 + ax^2 + bx \text{ have}$$

(a) local maximum at $x = -1$ and local minimum at $x = 3$

Solution:

$$f'(x) = 3x^2 + 2ax + b$$

$$f''(x) = 6x + 2a$$

Now $f'(-1) = 0$ and $f'(3) = 0$

$$3 - 2a + b = 0$$

$$27 + 6a + b = 0$$


$$a = 3$$

$$b = 3$$

(b) (exercise) a local minimum at $x = 4$ and a point of inflection at $x = 1$?